


Counting Numbers Activity 1

Maximum Expected Time Completion: 10 minutes

Counting Objects


Count the number of objects in each box and write the number in the blank space.

1.  _____

2.  _____

3.  _____

4.  _____



5.  _____


Disclaimer:

This worksheet is distributed for free and is not intended to measure a child's skills or intelligence. It is designed as a supplementary exercise to support the child's learning alongside the educational activities they receive from schools or other institutions.

6.  _____

7.  _____

8.  _____


9.  _____

10.  _____